

SAVITRI DAVI DAV PUBLIC SCHOOL, JAMTARA

SUMMER VACATION HOME WORK & PROJECT WORK-2022-23

CLASS--I

Maths

Worksheets based on number system

Write in increasing order.

(1) 48, 75, 32, 68, 48, 58

(2) 72, 84, 43, 100, 32, 99

Write in decreasing order.

(1) 92, 48, 85, 62, 39, 100

(2) 14, 98, 76, 85, 45, 68

Counting backwards write 69 – 58.

(1) 69 _____

(2) _____

Worksheets based on ordinal number

Ordinal Numbers

Q) Write 1st, 2nd, 3rd, 4th and 5th under the correct pictures. Then, fill in the blanks in the sentence below.



1. The



is in the _____ place.

2. The



is in the _____ place.

3. The



is in the _____ place.

4. The



is in the _____ place.












5. The



is in the _____ place.

Project work:- counting number based activities. (in chart


Q. Match the following.






	4th		fifth
	1st		seventh
	9th		sixth
	7th		first
	2nd		fourth
	6th		ninth
	3rd		second
	10th		eighth
	8th		third
	5th		tenth

paper)



Count and write:-



	<input type="text"/>		<input type="text"/>		<input type="text"/>
	<input type="text"/>		<input type="text"/>		